

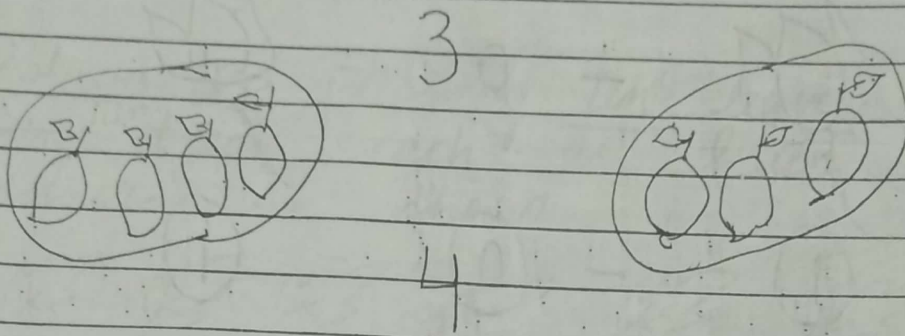


CLASS: Ist Math

(P-1)

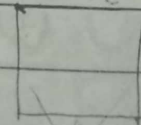
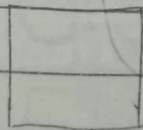
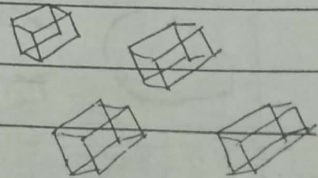


Saathi

Topic: Understanding 0-10

QNo1: Match the following numbers with mangoes as shown



QNo2: Count and write down the number of objects in the box






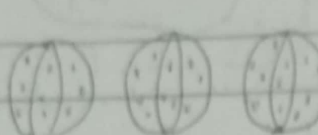
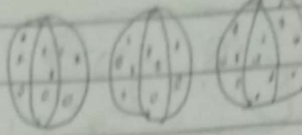
1st-Math  
Observe the following,



P-2

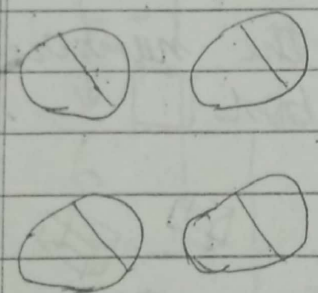
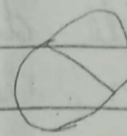
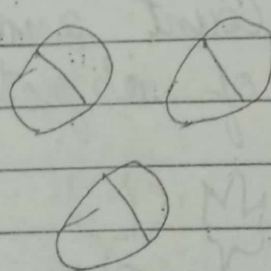
Search

Q.No.3

i)  -  =   
 $3 - 1 = 2$

ii)  -  $0$  =   
 $3 - 0 = 3$

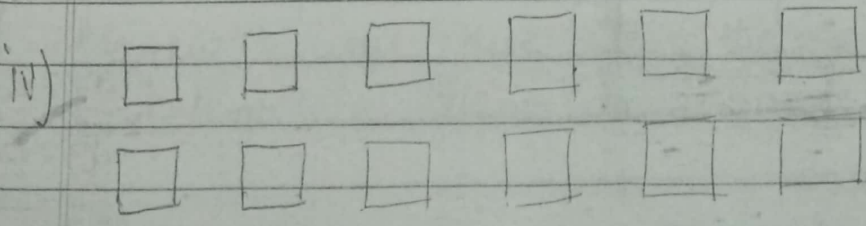
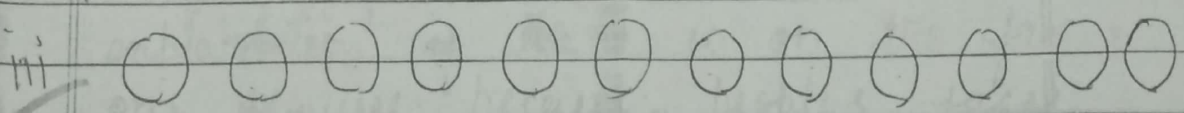
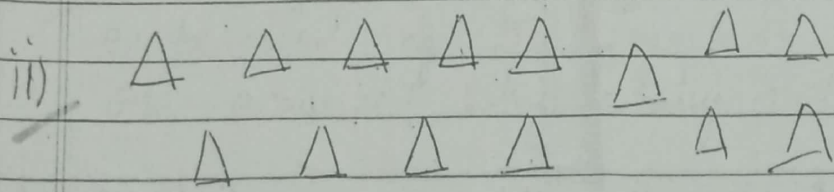

iii)  -  $0$  =   
 $1 - 0 = 1$

iv)  -  =   
 $4 - 1 = 3$

QNo4. Fill in the  $\bigcirc$  and complete these subtraction facts. Few are shown for you

$2-0=\bigcirc$	$7-0=\bigcirc$	$0+0=\bigcirc$
$1-0=\bigcirc$	$4-0=\bigcirc$	$9+0=\bigcirc$
$6-0=\bigcirc$	$5-0=\bigcirc$	$8+0=\bigcirc$
$8-8=\bigcirc$	$7-7=\bigcirc$	$4-4=\bigcirc$
$2-2=\bigcirc$	$2-0=\bigcirc$	$5-5=\bigcirc$

QNo5. colour the following ten leaves and <sup>ten</sup> objects each as green colour as shown.



Q No 6: Fill in the blanks as shown:-

a) ① One

$$0 + 1 = 1$$

b) ② Two

$$1 + 1 = 2$$

c) ③ Three

$$2 + 1 = 3$$

d) ④ Four

$$3 + 1 = 4$$

e) ⑤ Five

$$4 + 1 = \square$$

f) ⑥ Six

$$5 + 1 = \square$$

g) ⑦ Seven

$$6 + 1 = \square$$

h) ⑧ eight

$$7 + 1 = \square$$

i) ⑨ Nine

$$8 + 1 = \square$$

j) ⑩ Ten

$$9 + 1 = \square$$

