


HOME ASSIGNMENT FOR CLASS 1st SUB: MATHS


Q No 1: Match the objects to the correct number




a) 12




b) 16



c) 10



d) 5



e) 9



f) 4

Q No 2: Fill in the blanks

i) One more than 2 is

ii) One more than 3 is

iii) One more than 6 is

iv) One more than 8 is

Q No 3: Fill in the missing numbers

i) 4 comes just before

ii) 5 is between and

iii) 8 is between and

Q No 4: Arrange in increasing and decreasing order.

i) 9, 7, 2, 8, 4, 10

Increasing order:-

Decreasing order:-

Q No 5: Fill in the blanks

$$i) \begin{aligned} 2 + 7 &= \square \\ 7 + 2 &= \square \end{aligned}$$

$$ii) \begin{aligned} 1 + 4 &= \square \\ 4 + \square &= 5 \end{aligned}$$

$$iii) \begin{array}{r} 5 \\ + 3 \\ \hline \square \end{array}$$

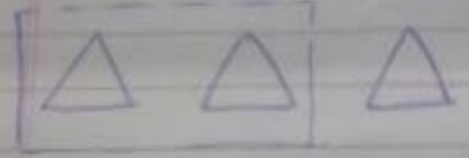
$$iv) \begin{array}{r} 2 \\ + 2 \\ \hline \square \end{array}$$

$$v) \begin{array}{r} 2 \\ + 4 \\ \hline \square \end{array}$$


$$vi) \begin{array}{r} 1 \\ + 2 \\ \hline \square \end{array}$$

Practice more questions on a rough notebook).

6: Complete these subtraction facts by filling in the blanks



$$3 - 2 = \bigcirc$$



$$5 - 2 = \bigcirc$$



$$4 - 1 = \bigcirc$$

Q No 7: There were 6 apples
The boys ate 2 apples
How many are left?

Solution: Apples = 6

$$\begin{array}{r} \text{Apples ate} = 2 \\ \underline{\quad\quad\quad} \\ \quad\quad\quad 4 \end{array} \quad \text{Apples left}$$

(one is done for you)

Q No 8: There were 7 leaves
4 leaves fly away.
How many are left?

Solution:

Q No 9: John has 2 oranges. Asim has 6 oranges.
How many oranges do they have
altogether?

Solution: John's oranges 2

$$\begin{array}{r} \text{Asim's oranges} + \\ \underline{\quad\quad\quad} \\ \quad\quad\quad 6 \\ \underline{\quad\quad\quad} \\ \quad\quad\quad 8 \end{array} \quad \text{Total oranges}$$

(one is done for you)

Q No 10: Ahmad has 5 marbles. Amal gives him 3 more marbles. How many marbles does Ahmad now have?

Solution:

(Practice more examples from your Maths book on rough notebook).

Q No 11: Fill in the blanks

a) $0 + 2 =$

b) $6 + 0 =$

c) $0 + 4 =$

d) $2 + 2 =$

e) $8 - 8 =$

f) $7 - 0 =$

g) $1 - 0 =$

Q. No. 11. Look at the position of these objects.

1st	2nd	3rd	4th	5th	6th	7th	8th	9th	10th
									
First	Second	Third	Fourth	Fifth	Sixth	Seventh	Eighth	Ninth	Tenth

These are called ordinal numbers.

Now Fill in the blanks as shown above. First one is done for you.

1. The apple is in the First position.
2. The Banana is in the _____ position.
- 3) The leaf is in the _____ position.
- 4) The grapes are in the _____ position.
- 5) The _____ is in the Third position.
- 6) The _____ is in the Sixth position.
- 7) The _____ is in the second position.

Q.No13:- Write in words from

1 to 150